

WARNING

This material has been reproduced and communicated to you by or on behalf of *Charles Darwin University* in accordance with section 113P of the *Copyright Act 1968 (Act)*.

The material in this communication may be subject to copyright under the Act.
Any further reproduction or communication of this material by you may be the subject of copyright protection under the Act.

Do not remove this notice



Family Name					
Given Name/s					
Student Number					
Teaching Period	Semester 1, 2018				

MLS 245 Medical Biochemistry	DURATION	
	Reading Time:	10 minutes
	Writing Time:	120 minutes
INSTRUCTIONS TO CANDIDATES		
<p>The examination has two sections:</p> <p>Section A: Suggested Time: 60 min Multiple Choice Questions: 25 questions</p> <p>Total: 50 marks (2 mark each)</p> <p>Section B: Suggested Time: 60 min Short Answer Questions: six questions</p> <p>Total: 45 marks</p> <p>Section A must be answered on the multiple-choice answer sheet provided and must be handed in with your answer booklet.</p> <p>Section B must be answered in the answer booklet.</p>		
EXAM CONDITIONS		
<p><u>You may begin writing from the commencement of the examination session.</u> The reading time indicated above is provided as a guide only.</p>		
This is a CLOSED BOOK examination		
Any non-programmable calculator is permitted		
No handwritten notes are permitted		
No dictionaries are permitted		
ADDITIONAL AUTHORISED MATERIALS	EXAMINATION MATERIALS TO BE SUPPLIED	
No additional printed material is permitted	1 x 16 Page Book 1 x Scrap Paper College Multiple Choice Answer Sheet	

**THIS EXAMINATION IS PRINTED
DOUBLE-SIDED.**

**THIS PAGE HAS BEEN INTENTIONALLY
LEFT BLANK.**

Section A

Section B

Case Study Based Questions

Total Number of Marks for this section: 45 Marks

This section should be answered in the Answer Booklet provided.

Marks for each question are indicated.

Suggested Time allocation for Section B: 60 minutes

Question 1

- i. What phenomenon in genetic coding does “wobble” refer to? Give a brief description.
- ii. Explain the benefit of using thymine in DNA instead of uracil.
Thymine has greater resistance to photochemical mutation, making the genetic message more stable.

(3+3 = 6 Marks)

Question 2

You want to design an experiment to determine the order of genes in the *lac* operon. You selectively block RNA polymerase before it transcribes each gene in the operon and then measure the protein levels of each of the genes transcribed by the *lac* operon. The results are in the table below

Gene Blocked	Permease Produced	Beta-galactosidase Produced	Transacetylase Produced
Gene 1	No	No	No
Gene 2	No	Yes	No
Gene 3	Yes	Yes	No

- i. What is the correct sequence of proteins found in the *lac* operon?
- ii. What is the benefit of the repressor being constitutively (constantly) produced?
- iii. In the *lac* operon, the repressor protein exerts a negative effect on the expression of the structural genes in the absence of the inducer molecule. In the case of the *lac* operon, what is the inducer molecule?
- iv. Why does *E.coli* have polycistronic messages?

- v. What will happen when lactose is present as the sole energy source?

(2+1+1+1+1=6 Marks)

Question 3

In a biochemistry experiment, *Student A* investigates the enzyme kinetic reaction of lactate dehydrogenase (LDH). He extracts the LDH from chicken breast fillet he bought at supermarket, and uses lactate as the substrate for this experiment. After preparing various concentration of substrate with the same amount of enzyme, he determines the initial rate of the reactions as displayed in following table:

(Note: LDH is a group of enzymes that catalyze the reaction which interconvert lactate and pyruvate, and found abundance in animal tissues.)

Substrate concentration (mM)	Initial velocity (V_0) $\mu\text{M sec}^{-1}$
2	16.2
4	27.0
6	32.0
8	35.0
10	36.0

Student A is told that the LDH he extracted from chicken breast may contain compound(s) that interfere with the enzyme. He repeats the experiment using the same amount of LDH, but with purified laboratory graded enzyme. The result he recorded is displayed as follow:

Substrate concentration (mM)	Initial velocity (V_0) $\mu\text{M sec}^{-1}$
2	23.2
4	38.0
6	46.0
8	50.0
10	52.0

Answer the following questions:

- What is the V_{max} and K_m for each of the enzymatic reaction?
- How would you explain the two different sets of results, considering that *Student A* has used the exact same amount of LDH enzyme?
- If this reaction is to occur within a living chicken (Note: chicken has normal body temperature of $\sim 41^\circ\text{C}$), how would this reaction rate different?

(6+3+3 = 12 Marks)

Question 4

Ribosomes were isolated from bacteria grown in a “heavy” medium (^{13}C and ^{15}N) and from bacteria grown in a “light” medium (^{12}C and ^{14}N). These 60S ribosomes were added to an *in vitro* system actively engaged in protein synthesis. An aliquot removed several hours later was analysed by density-gradient centrifugation.

How many bands of 70S ribosomes would you expect to see in the density gradient?

(4 Marks)

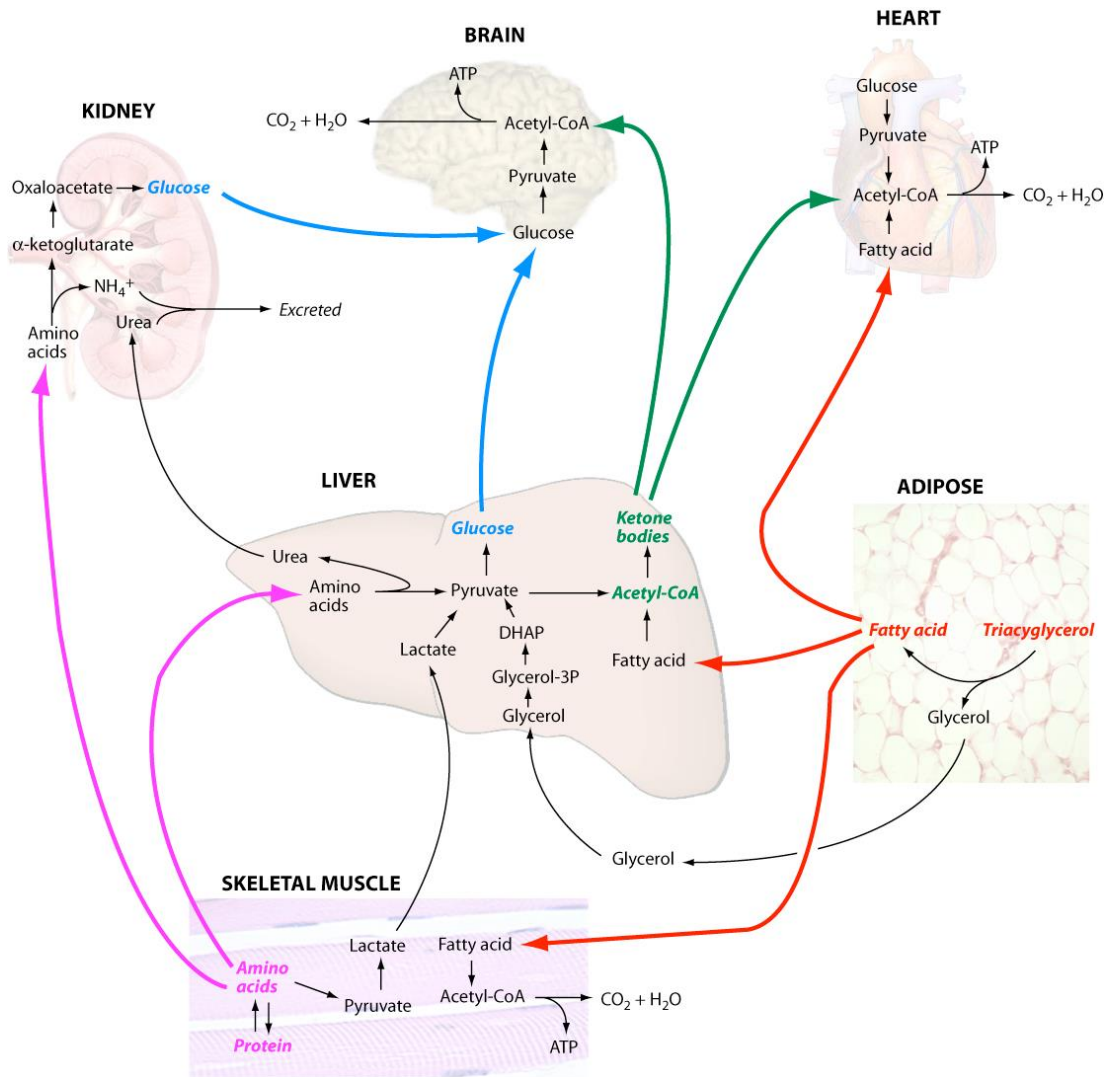
Question 5

What are the key enzymatic differences between liver, kidney, muscle, and brain that account for their differing utilization of metabolic fuels?

(5 Marks)

Question 6

Metabolite flux between major tissues and organs in the human body under starvation conditions is illustrated in the figure below:



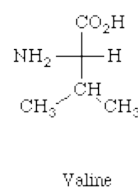
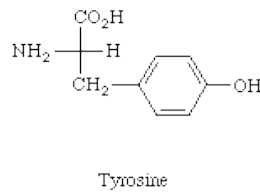
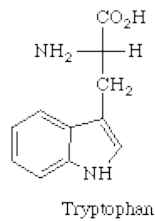
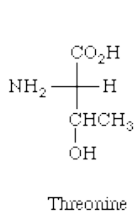
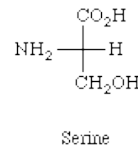
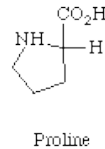
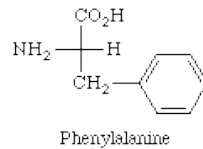
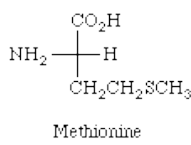
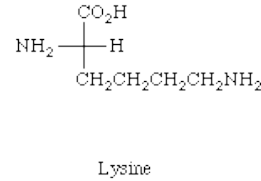
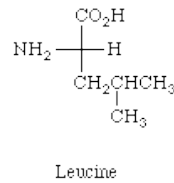
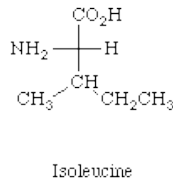
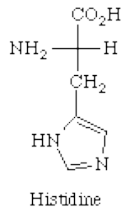
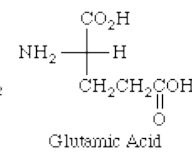
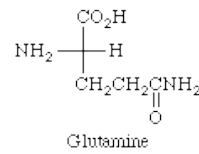
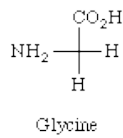
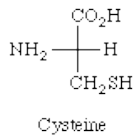
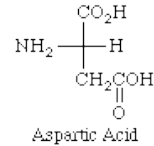
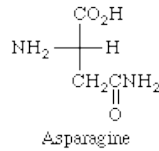
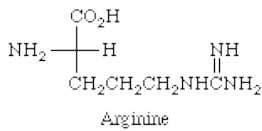
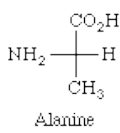
Once glycogen stores are depleted (first 24 hours), there are four major alterations in metabolic flux that permit humans to survive long periods of time without food. Please give a summary of these **four** alterations.

(12 Marks)

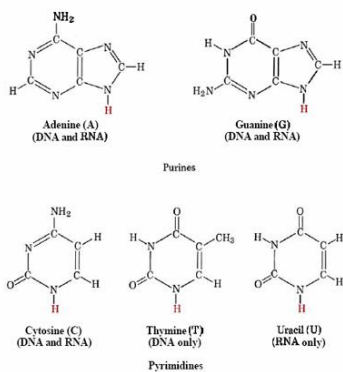
Appendix

Amino Acid Structures

The following amino acid structures are listed in alphabetical order. Ionizable groups are shown in their neutral form - this implies absolutely nothing about the predominant form at any particular pH.



Nucleic acids structures



The following table gives the pKa values for the α -carboxylic acid group, the α -amino group, and any ionizable side chains.

Amino Acid	α -carboxylic acid	α -amino	Side chain
Alanine	2.35	9.87	
Arginine	2.01	9.04	12.48
Asparagine	2.02	8.80	
Aspartic Acid	2.10	9.82	3.86
Cysteine	2.05	10.25	8.00
Glutamic Acid	2.10	9.47	4.07
Glutamine	2.17	9.13	
Glycine	2.35	9.78	
Histidine	1.77	9.18	6.10
Isoleucine	2.32	9.76	
Leucine	2.33	9.74	
Lysine	2.18	8.95	10.53
Methionine	2.28	9.21	
Phenylalanine	2.58	9.24	
Proline	2.00	10.60	
Serine	2.21	9.15	
Threonine	2.09	9.10	
Tryptophan	2.38	9.39	
Tyrosine	2.20	9.11	10.07
Valine	2.29	9.72	

Equations:

Michaelis-Menten equation

Semester 1, 2018

FINAL EXAMINATION
MLS 245 Medical Biochemistry

$$V_0 = \frac{V_{\text{MAX}} [S]}{[S] + K_M}$$

page 8 of 9

Lineweaver-Burk plot

Plot of $1/V$ versus $1/[S]$ (\rightarrow straight plot)

intercept $1/V_{MAX}, -1/K_M$

slope K_M/V_{MAX}

$$\frac{1}{V} = \frac{1}{V_{MAX}} + \frac{K_M}{V_{MAX} [S]}$$